

Ch 25. 전위

- Given two $2.00\text{-}\mu\text{C}$ charges, as shown in Figure P25.16, and a positive test charge $q = 1.28 \times 10^{-18}\text{ C}$ at the origin, (a) what is the net force exerted by the two $2.00\text{-}\mu\text{C}$ charges on the test charge q ? (b) What is the electric field at the origin due to the two $2.00\text{-}\mu\text{C}$ charges? (c) What is the electrical potential at the origin due to the two $2.00\text{-}\mu\text{C}$ charges?

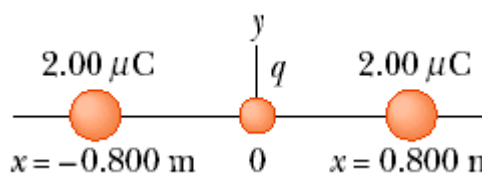


Figure P25.16

- A rod of length L (Fig. P25.43) lies along the x axis with its left end at the origin. It has a nonuniform charge density $\lambda = \alpha x$, where α is a positive constant. (a) What are the units of α ? (b) Calculate the electric potential at A .

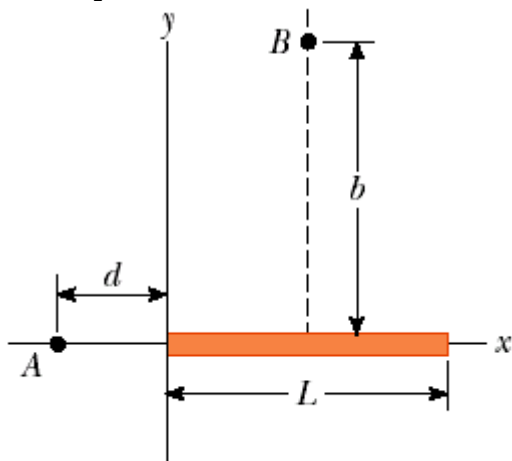


Figure P25.43

- A spherical conductor has a radius of 14.0 cm and charge of $26.0\text{ }\mu\text{C}$. Calculate the electric field and the electric potential (a) $r = 10.0\text{ cm}$, (b) $r = 20.0\text{ cm}$, and (c) $r = 14.0\text{ cm}$ from the center.
- Calculate the electric potential at point P on the axis of the annulus shown in Figure P25.46, which has a uniform charge density σ .

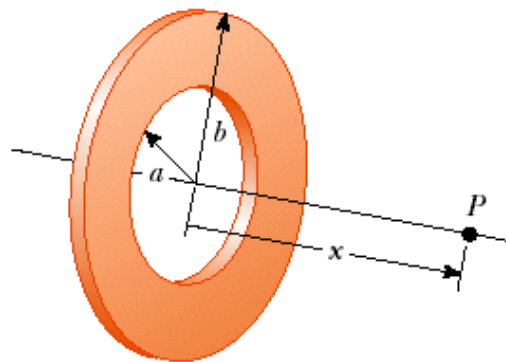


Figure P25.46

5. A Geiger tube is a radiation detector that essentially consists of a closed, hollow metal cylinder (the cathode) of inner radius r_a and a coaxial cylindrical wire (the anode) of radius r_b (Fig. P25.61). The charge per unit length on the anode is λ , while the charge per unit length on the cathode is $-\lambda$. A gas fills the space between the electrodes. When a high-energy elementary particle passes through this space, it can ionize an atom of the gas. The strong electric field makes the resulting ion and electron accelerate in opposite directions. They strike other molecules of the gas to ionize them, producing an avalanche of electrical discharge. The pulse of electric current between the wire and the cylinder is counted by an external circuit. (a) Show that the magnitude of the potential difference between the wire and the cylinder is

$$\Delta V = 2k_e \lambda \ln \left(\frac{r_a}{r_b} \right)$$

- (b) Show that the magnitude of the electric field in the space between cathode and anode is given by

$$E = \frac{\Delta V}{\ln(r_a / r_b)} \left(\frac{1}{r} \right)$$

where r is the distance from the axis of the anode to the point where the field is to be calculated.

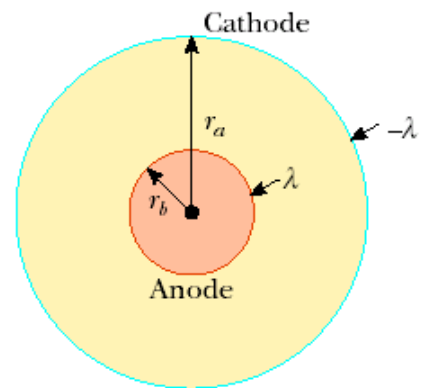


Figure P25.61

Ch. 26. 전기용량과 유전체

1. An air-filled capacitor consists of two parallel plates, each with an area of 7.60 cm^2 , separated by a distance of 1.80 mm . A 20.0-V potential difference is applied to these plates. Calculate (a) the electric field between the plates, (b) the surface charge density, (c) the capacitance, and (d) the charge on each plate.
2. Three capacitors are connected to a battery as shown in Figure P26.22. Their capacitances are $C_1 = 3C$, $C_2 = C$, and $C_3 = 5C$. (a) What is the equivalent capacitance of this set of capacitors? (b) State the ranking of the capacitors according to the charge they store, from largest to smallest. (c) Rank the capacitors according to the potential differences across them, from largest to smallest. (d) **What If?** If C_3 is increased, what happens to the charge stored by each of the capacitors?

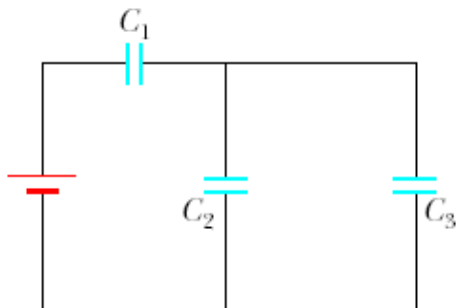


Figure P26.22

3. Consider the circuit shown in Figure P26.23, where $C_1 = 6.00 \mu\text{F}$, $C_2 = 3.00 \mu\text{F}$, and $\Delta V = 20.0 \text{ V}$. Capacitor C_1 is first charged by the closing of switch S_1 . Switch S_1 is then opened, and the charged capacitor is connected to the uncharged capacitor by the closing of S_2 . Calculate the initial charge acquired by C_1 and the final charge on each capacitor.

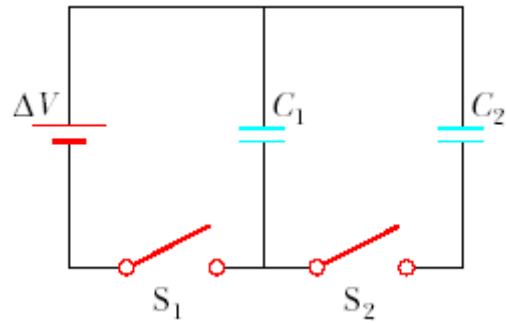


Figure P26.23

4. Two large parallel metal plates are oriented horizontally and separated by a distance $3d$. A conducting wire joins them, and initially each plate carries no charge. Now a third identical plate carrying charge Q is inserted between the two plates, parallel to them and located a distance d from the upper plate, as in Figure P26.57. (a) What induced charge appears on each of the two original plates? (b) What potential difference appears between the middle plate and each of the other plates? Each plate has area A .



Figure P26.57

5. A capacitor is constructed from two square plates of sides ℓ and separation d . A material of dielectric constant κ is inserted a distance x into the capacitor, as shown in Figure P26.64. Assume that d is much smaller than x . (a) Find the equivalent capacitance of the device. (b) Calculate the energy stored in the capacitor, letting ΔV represent the potential difference. (c) Find the direction and magnitude of the force exerted on the dielectric, assuming a constant potential difference ΔV . Ignore friction. (d) Obtain a numerical value for the force assuming that $\ell = 5.00$ cm, $\Delta V = 2\,000$ V, $d = 2.00$ mm, and the dielectric is glass ($\kappa = 4.50$). (Suggestion: The system can be considered as two capacitors connected in parallel.)

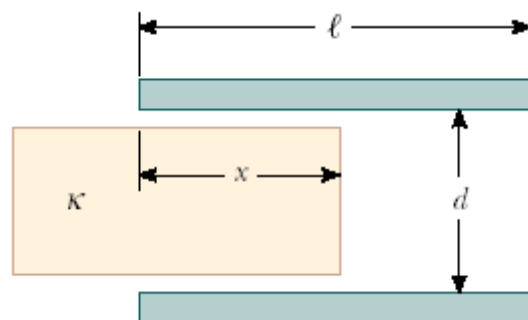


Figure P26.64